

Daily Math Review – Week #2 – Monday

Name: _____ Date: _____

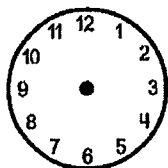
Ⓐ Finish the pattern:

A B C D C A B C D C _ _ _ _ _

Ⓑ Solve this story problem. Show your work.

Sydney had 8 books. Her mom gave her some more, then she had 13 in all. How many did her mom give her? _____

Ⓒ Make the clock say 12:30.



Ⓓ Circle all the numbers greater than 85.

82 75 91 103 89 95 84 87

Ⓔ Circle the odd numbers.

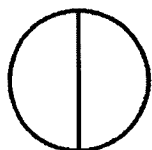
71 84 66 93 52 77 43 80

Ⓕ Fill in the missing numbers:

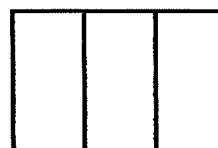
$$4 + \underline{\quad} = 13 \qquad 9 + \underline{\quad} = 16$$

$$\underline{\quad} + 6 = 17 \qquad \underline{\quad} + 8 = 16$$

Ⓖ Color $\frac{1}{2}$ of the circle.



Ⓖ Color $\frac{1}{3}$ of the rectangle.



Ⓘ Write the numbers:

eighty-two _____ ninety-five _____

forty-nine _____ fifty-six _____

Ⓙ If you measured a line with different objects, laid end to end and touching each other, circle the object you would use the most of:

jelly beans pencils gift cards

Daily Math Review – Week #2 – Tuesday

Name: _____ Date: _____


Ⓐ Color the sixth circle:



Ⓑ Write equations using 7, 8, and 15.

$$\begin{array}{l} \underline{\quad} + \underline{\quad} = \underline{\quad} \quad \underline{\quad} + \underline{\quad} = \underline{\quad} \\ \underline{\quad} - \underline{\quad} = \underline{\quad} \quad \underline{\quad} - \underline{\quad} = \underline{\quad} \end{array}$$

Ⓒ Name the solid figures:



Ⓔ Fill in the missing sign: $<$, $>$, or $=$.

36 _____ $30+6$ Double 8 _____ 17

5+6 _____ $5+4$ 45 _____ 54

Ⓓ Solve these equations:

$$\begin{array}{r} 45 \\ +33 \\ \hline \end{array} \quad \begin{array}{r} 73 \\ +16 \\ \hline \end{array} \quad \begin{array}{r} 96 \\ -35 \\ \hline \end{array} \quad \begin{array}{r} 75 \\ -42 \\ \hline \end{array}$$

Ⓕ Look at this number: 98

How many ones are there? _____

How many tens are there? _____

Is it even or odd? _____

Ⓖ How much money?



_____ ¢

Ⓗ Draw 45¢.

Ⓘ Name the shapes:



Ⓙ Fill in the missing signs: $+$ or $-$.

$4 \bigcirc 10 = 14$ $14 \bigcirc 9 = 5$

$16 \bigcirc 8 = 8$ $5 \bigcirc 8 = 13$

Daily Math Review – Week #2 – Wednesday

Name: _____ Date: _____

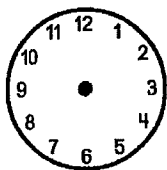
Ⓐ Finish the pattern:

A B C B D A B C B D _ _ _ _ _

Ⓑ Solve this story problem. Show your work.

Sydney had 6 books. Her mom gave her some more, then she had 10 in all. How many did her mom give her? _____

Ⓒ Make the clock say 2:30.



Ⓓ Circle all the numbers greater than 80.

82 75 91 103 79 95 84 67

Ⓔ Circle the even numbers.

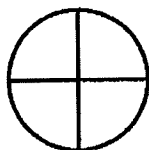
80 75 62 87 21 94 106 49

Ⓕ Fill in the missing numbers:


$$6 + \underline{\quad} = 13 \qquad 12 + \underline{\quad} = 16$$

$$\underline{\quad} + 6 = 15 \qquad \underline{\quad} + 8 = 12$$

Ⓖ Color $\frac{1}{4}$ of the circle.



Ⓖ Color $\frac{1}{2}$ of the rectangle.



Ⓘ Write the numbers:

eighty-five _____ twenty-five _____

forty _____ sixteen _____

Ⓙ If you measured a line with different objects, laid end to end and touching each other, circle the object you would use the most of:

straws peanuts toy cars

Daily Math Review – Week #2 – Thursday

Name: _____ Date: _____

Ⓐ Color the second circle:



Ⓑ Write equations using 3, 6, and 9.

____ + ____ = ____ ____ + ____ = ____

____ - ____ = ____ ____ - ____ = ____

Ⓒ Name the solid figures:



Ⓔ Fill in the missing sign: <, >, or =.

45 ____ 40+5 Double 7 ____ 15

7+6 ____ 5+7 87 ____ 78

Ⓓ Solve these equations:

36	21	78	99
<u>+33</u>	<u>+16</u>	<u>-35</u>	<u>-42</u>

Ⓕ Look at this number: 56

How many ones are there? ____

How many tens are there? ____

Is it even or odd? ____

Ⓖ How much money?



_____ ¢

Ⓖ Draw 27¢.

Ⓘ Name the shapes:



Ⓙ Fill in the missing signs: + or - .

6 ○ 10 = 16 15 ○ 7 = 8

1 ○ 8 = 9 10 ○ 5 = 15

Weekly Math Quiz – Week #2 – Page 1

Name: _____ Date: _____

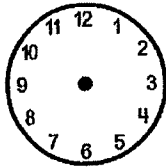
Ⓐ Finish the pattern:

A B C D B A B C D B _ _ _ _ _

Ⓑ Solve this story problem. Show your work.

Sydney had 9 books. Her mom gave her some more, then she had 15 in all. How many did her mom give her? _____

Ⓒ Make the clock say 8:30.



Ⓓ Circle all the numbers greater than 75.

82 72 91 103 69 95 74 77

Ⓔ Circle the even numbers.

75 54 89 61 38 32 90 43

Ⓕ Fill in the missing numbers:

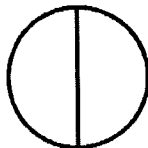
$$4 + \underline{\quad} = 11$$

$$9 + \underline{\quad} = 13$$

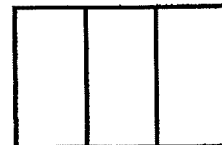
$$\underline{\quad} + 6 = 12$$

$$\underline{\quad} + 10 = 16$$

Ⓖ Color $\frac{1}{2}$ of the circle.



Ⓖ Color $\frac{1}{3}$ of the rectangle.



Ⓘ Write the numbers:

seventy-two _____ fifty-five _____

forty-eight _____ twenty-six _____

Ⓙ If you measured a line with different objects, laid end to end and touching each other, circle the object you would use the most of:

jelly beans

straws

toy cars

Weekly Math Quiz – Week #2 –Page 2

Ⓚ Color the fourth circle:




Ⓛ Write equations using 4, 8, and 12.

$$\underline{\quad} + \underline{\quad} = \underline{\quad} \quad \underline{\quad} + \underline{\quad} = \underline{\quad}$$

$$\underline{\quad} - \underline{\quad} = \underline{\quad} \quad \underline{\quad} - \underline{\quad} = \underline{\quad}$$

Ⓜ Name the solid figures:



Ⓝ Solve these equations:

$$\begin{array}{r} 42 \\ +33 \\ \hline \end{array} \quad \begin{array}{r} 73 \\ +15 \\ \hline \end{array} \quad \begin{array}{r} 96 \\ -34 \\ \hline \end{array} \quad \begin{array}{r} 75 \\ -41 \\ \hline \end{array}$$

Ⓞ Fill in the missing sign: <, >, or =.

$$46 \underline{\quad} 40+6 \quad \text{Double } 9 \underline{\quad} 17$$

$$5+6 \underline{\quad} 5+7 \quad 48 \underline{\quad} 84$$

Ⓟ Look at this number: 37

How many ones are there? _____

How many tens are there? _____

Is it even or odd? _____

Ⓠ How much money?



_____ ¢

Ⓡ Draw 25¢.

Ⓢ Name the shapes:



Ⓣ Fill in the missing signs: + or - .

$$14 \bigcirc 2 = 12 \quad 4 \bigcirc 4 = 8$$

$$14 \bigcirc 7 = 7 \quad 5 \bigcirc 6 = 11$$